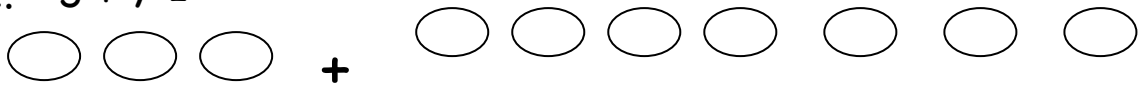


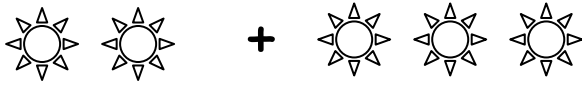
Name:

Time taken:


1. $3 + 7 =$



2. $2 + 3 =$



3. $4 + 5 =$



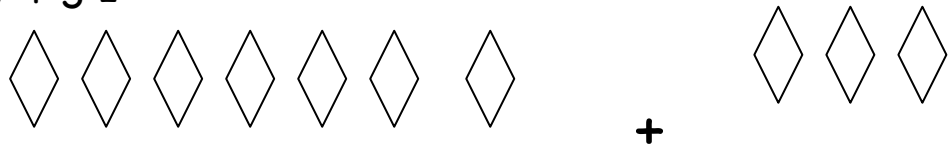
4. $6 + 5 =$



5. $7 + 6 =$



6. $7 + 3 =$



7. $5 + 2 =$



8. $3 + 4 =$



Name:

Time taken:


9. $6 - 3 =$



10. $3 - 2 =$



11. $5 - 2 =$



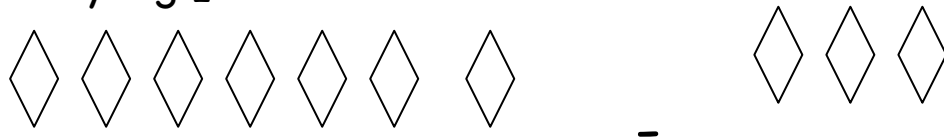
12. $6 - 3 =$



13. $7 - 6 =$



14. $7 - 3 =$



15. $5 - 2 =$



16. $4 - 1 =$

